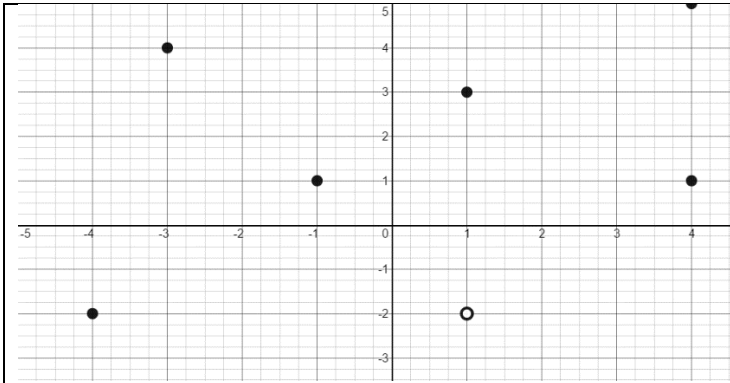


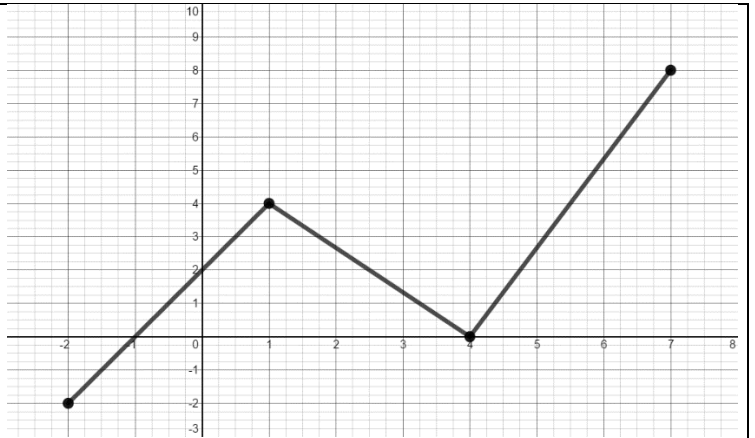
WAY COOL Algebra
FUNCTION PROPERTIES

Name _____
 Date _____ Period _____

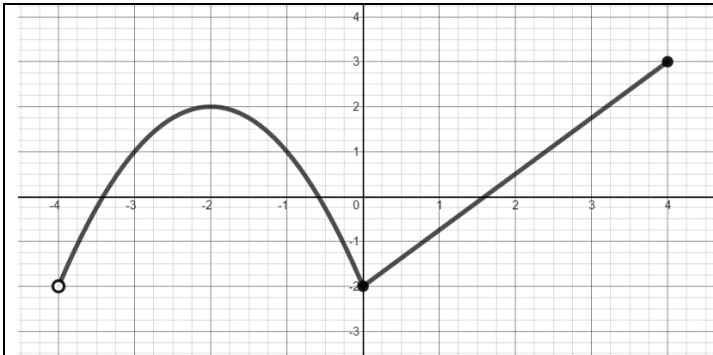
Fill in the properties for each graph.



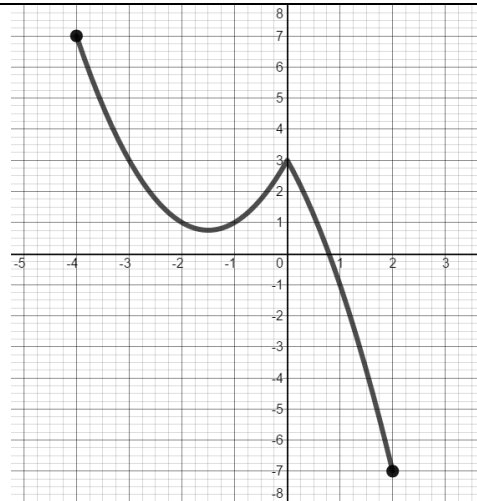
TYPE:	_____
DOMAIN:	_____
RANGE:	_____
MAX:	_____
MIN:	_____
DECREASE:	_____
INCREASE:	_____



TYPE:	_____
DOMAIN:	_____
RANGE:	_____
MAX:	_____
MIN:	_____
DECREASE:	_____
INCREASE:	_____



TYPE:	_____
DOMAIN:	_____
RANGE:	_____
MAX:	_____
MIN:	_____
DECREASE:	_____
INCREASE:	_____



TYPE:	_____
DOMAIN:	_____
RANGE:	_____
MAX:	_____
MIN:	_____
DECREASE:	_____
INCREASE:	_____