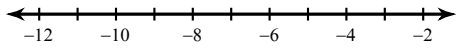


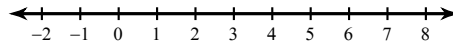
One-Step Inequalities

Solve each inequality and graph its solution.

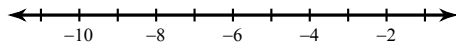
1) $-12 > x - 7$



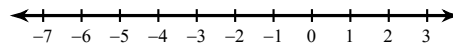
2) $-1 + r \geq 4$



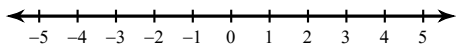
3) $n - 6 \leq -14$



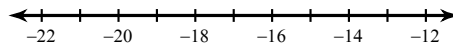
4) $b - 7 < -12$



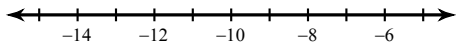
5) $a - 17 > -16$



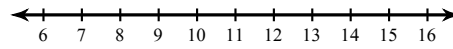
6) $15 + x \leq 0$



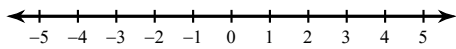
7) $3 + v \leq -9$



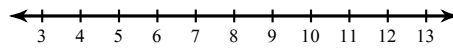
8) $8 \geq n - 6$



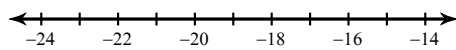
9) $-3x > 3$



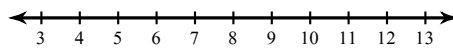
10) $\frac{n}{3} > 3$



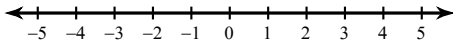
11) $\frac{k}{4} < -4$



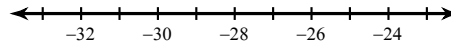
12) $-9x \geq -90$



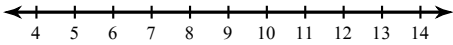
$$13) 0 \geq 7n$$



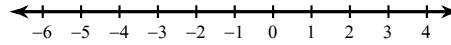
$$14) \frac{m}{5} \geq -5$$



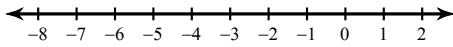
$$15) -13x < -156$$



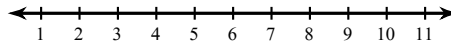
$$16) 32 \geq -16p$$



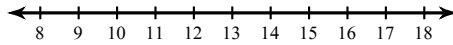
$$17) -8 > v - 3$$



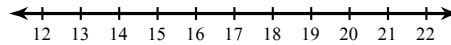
$$18) 11 \leq 5 + x$$



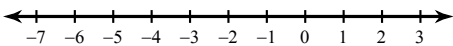
$$19) 25 \geq n + 13$$



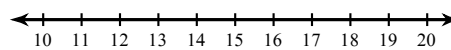
$$20) -168 > -12a$$



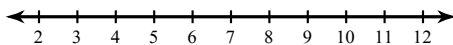
$$21) -3 \leq x - 4$$



$$22) \frac{r}{3} > 6$$



$$23) 12n \geq 84$$



$$24) -22 > -10 + b$$

